

INDIAN SCHOOL MUSCAT PRIMARY SECTION	
SUBJECT: SCIENCE	NAME: _____
REVISION WORKSHEET NO : 1	STD: III SEC: ROLL NO:
TEACHER'S SIGNATURE	DATE: ____ / ____ /18

I. Tick the right answer.

a. Huge balls of very hot gases

stars	planets	Moon
-------	---------	------

b. Earth revolves around the Sun

once in a day	once in a year	twice a year
---------------	----------------	--------------

c. The number of days between one New Moon and the next

14 days	28 days	7 days
---------	---------	--------

d. Bouncing of light from any object

filtration	vibration	reflection
------------	-----------	------------

e. The closest neighbour of the Earth in space

Jupiter	Moon	Sun
---------	------	-----

f. The heavenly bodies that go around the Sun in a fixed path

planets	stars	Moon
---------	-------	------


II. Name the following.

a. The pattern formed by stars in the sky _____

b. The imaginary line along which the earth spins _____

c. The ability to do work _____

d. The star nearest to the earth _____




- e. Loud and unpleasant sound _____
- f. This is formed when the path of light is blocked _____

III. Tick the correct statement.

- a. Planets do not have light of their own.
- b. A book is an example of a luminous object.
- c. A force can make a moving body stop.

IV. Draw the structure of the Earth and label the different layers.



V. Answer the following questions.

1. a. What is force ? How does it help us?



b. Why does the Moon appear to change its shape?

2. Write any two differences between Rotation and Revolution

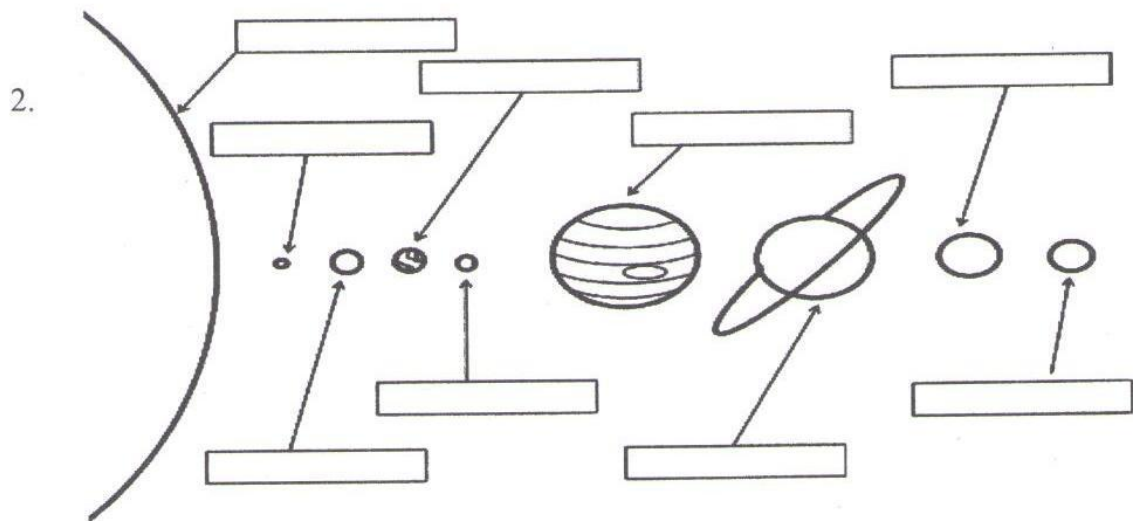
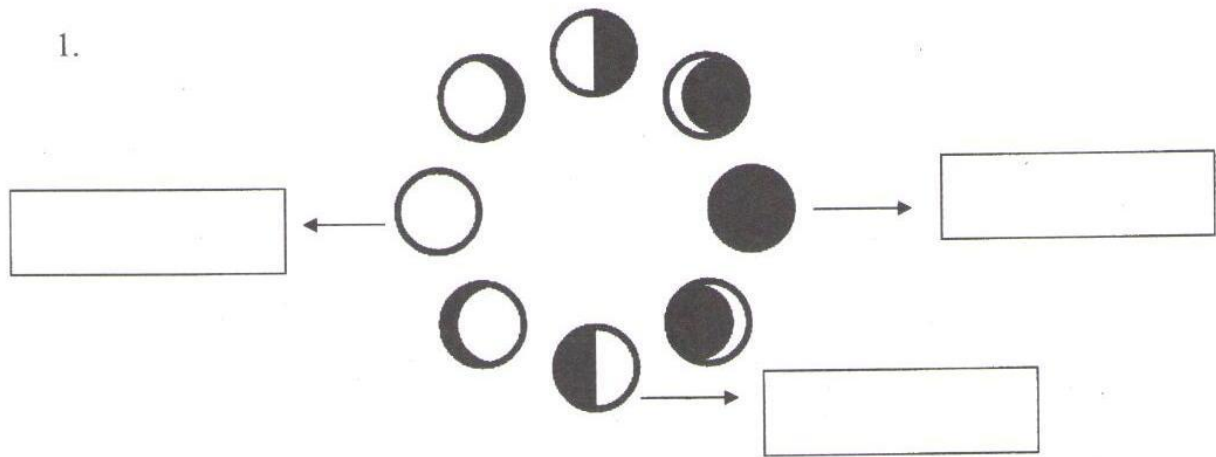
Rotation	Revolution
1.	1.
2.	2.

VI. Give reasons.

1. Stars look small in the sky.

2. Petrol is filled in cars.

VII. Label the diagrams given below.



VIII. Life Skill.

How can we be eco-friendly?

Put a tick for the right options.

- a. Use paper or jute bags to carry things.
- b. Play entertainment gadgets in high volume.
- c. Use cycles for short distances or walk.
- d. Throw garbage in the area around your house .

<input type="checkbox"/>
<input type="checkbox"/>
<input type="checkbox"/>
<input type="checkbox"/>